

13.5

$$\frac{x+1}{x-5} \leq 0$$


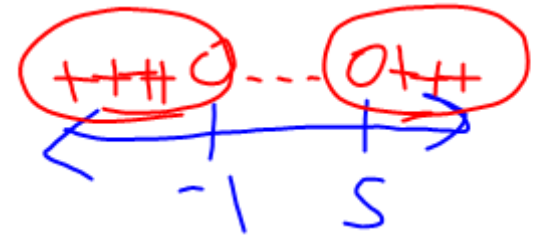
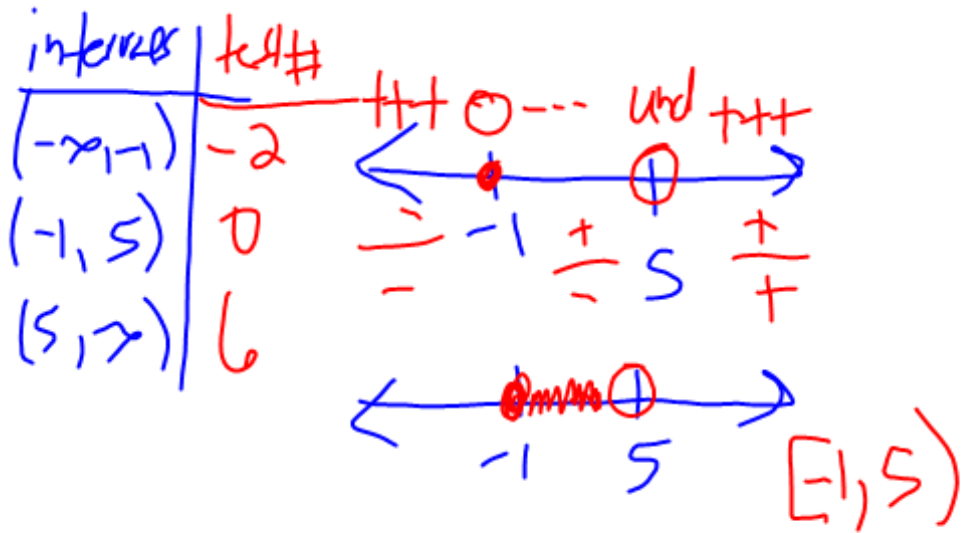
Solve & graph

Zero: $x = -1$

und: $x \neq 5$

$$(x+1)(x-5) \geq 0$$

Zeros: $x = -1, x = 5$



13. 4

4-Subs

$$23. \underline{x^{\frac{2}{3}}} - 9\underline{x^{\frac{1}{3}}} + 8 = 0$$

Solve using u-substitution

$$\text{let } u = x^{\frac{1}{3}}$$

$$u^2 = (x^{\frac{1}{3}})^2 = x^{\frac{2}{3}}$$

$$u^2 - 9u + 8 = 0$$

$$(u - 8)(u - 1) = 0$$

$$u = 8 \quad u = 1$$

$$u = 8 \qquad u = 1$$

$$x^{\frac{1}{3}} = 8 \qquad x^{\frac{1}{3}} = 1$$

$$\sqrt[3]{x} = 8^3 \qquad \sqrt[3]{x} = 1^3$$

$$x = 512 \qquad x = 1$$

13.1 Quadratics

- Square root method
- Complete the square

$$3(\boxed{X-1})^2 = 6$$

$$\frac{3}{3} \frac{3}{3}$$

$$\sqrt{(X-1)^2} = \pm\sqrt{2}$$

$$X-1 = \pm\sqrt{2}$$

$$X = 1 \pm \sqrt{2}$$

By completing the square

$$X^2 - 5X + 1 = 0$$

$$X^2 - 5X + \frac{25}{4} = -\frac{4}{4} + \frac{25}{4}$$

$$\frac{1}{2} \left(\frac{-5}{1} \right)$$

$$\left(\frac{-5}{2} \right)^2$$

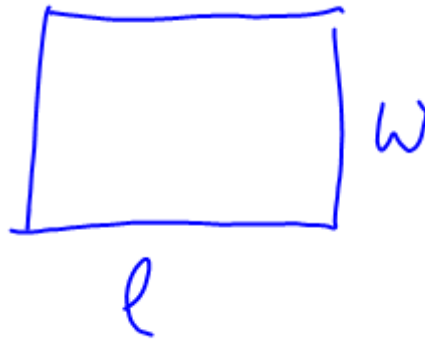
$$\sqrt{\left(X - \frac{5}{2}\right)^2} = \pm \frac{\sqrt{21}}{\sqrt{4}}$$

$$X - \frac{5}{2} = \pm \frac{\sqrt{21}}{2}$$

$$X = \frac{5}{2} \pm \frac{\sqrt{21}}{2}$$



$$a^2 + b^2 = c^2$$



$$A = l \cdot w$$

$$P = 2l + 2w$$

13.2 Quadratic Formula

$$x = \frac{-b \pm \sqrt{b^2 - 4ac}}{2a}$$

$$2x^2 - 3x - 1 = 0 \quad \text{Solve}$$

$$x = \frac{-(-3) \pm \sqrt{(-3)^2 - 4(2)(-1)}}{2(2)}$$

$$x = \frac{3 \pm \sqrt{9 + 8}}{4} = \frac{3 \pm \sqrt{17}}{4}$$

$b^2 - 4ac$
discriminant

$x = -\frac{b}{2a}$ vertex
Formula

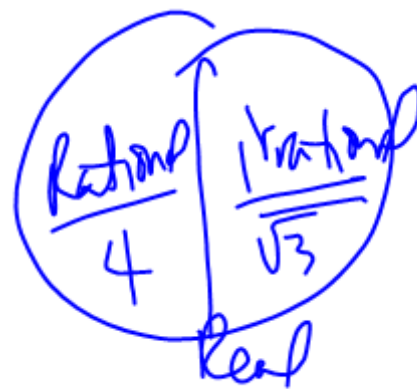
find the # & type of solutions of

$$2x^2 - 8x - 4 = 0$$

$$b^2 - 4ac = (-8)^2 - 4(2)(-4)$$

$$64 + 32$$

$$\underline{\underline{96}}$$



2 irrational
sols

$$\left\{ 1 + 3\sqrt{2}, 1 - 3\sqrt{2} \right\}$$

find a Quadratic equation with these solns

$$X = 1 + 3\sqrt{2}$$

$$X = 1 - 3\sqrt{2}$$

13.2

$$X - 1 - 3\sqrt{2} = 0$$

$$X - 1 + 3\sqrt{2} = 0$$

$$(X - 1 - 3\sqrt{2})(X - 1 + 3\sqrt{2}) = 0$$

$$\begin{array}{r} X^2 - X + 3\sqrt{2}X - 18 + 3\sqrt{2} \\ - X - 3\sqrt{2}X + 1 - 3\sqrt{2} \\ \hline \end{array} \quad -9.2$$

$$X^2 - 2X - 17 = 0$$

15. The function

$$f(x) = -0.5x^2 + 4x + 19$$

models the number of people in the United States, $f(x)$, in millions, receiving food stamps x years after 1990. In which year(s) were 20 million people receiving food stamps? Use a calculator and round to the nearest year(s).

$$20 = -0.5x^2 + 4x + 19$$

$$0 = -0.5x^2 + 4x - 1$$

$$x = \frac{-4 \pm \sqrt{(4)^2 - 4(-.5)(-1)}}{2(-.5)}$$

$$= \frac{-4 \pm \sqrt{16 - 2}}{-1}$$

$$= \frac{+4 \pm \sqrt{14}}{-1} \rightarrow \begin{aligned} 4 + \sqrt{14} &= 7.7 \approx 8 \\ 4 - \sqrt{14} &= 0.2 \approx 0 \end{aligned}$$

In 1990 &
In 1998 there
were 20 million
people on
food stamps

$$f(x) = -0.5x^2 + 4x + 19$$

Vertex Form

$$X = \frac{-b}{2a} = \frac{-4}{2(-0.5)}$$

$$= 4$$

in 1994 the # of people
on food stamps was max.

$$f(4) = -0.5(4)^2 + 4(4) + 19 = \underline{27 \text{ million people}}$$

13.3

in what year was

it a max?

people?

B3 Graphing

$$y = a(x-h)^2 + k$$

Vertex Form

$$y = x^2 - 2x - 3$$

① Find the vertex by completing the square

$$y + 3 + 1 = x^2 - 2x + 1$$

$$y + 4 = 1(x-1)^2$$

$$y = (x-1)^2 - 4$$

$$V(1, -4) \text{ min}$$

$$y = (x-1)^2 - 4$$

$$V (1, -4) \text{ min}$$

X-intercepts

$$\text{let } y=0$$

$$0 = (x-1)^2 - 4$$

$$\pm \sqrt{4} = \sqrt{(x-1)^2}$$

$$\pm 2 = x-1$$

$$x = 1 \pm 2 = 3, -1$$

y-intercept

$$\text{let } x=0$$

$$y = (-1)^2 - 4$$

$$y = -3$$

